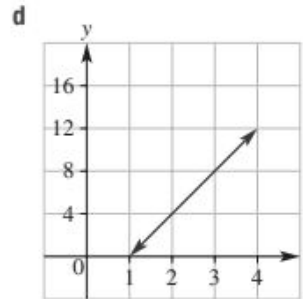
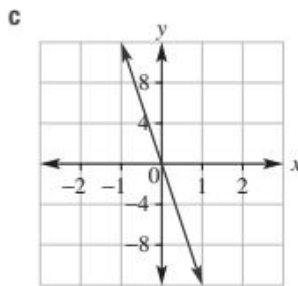
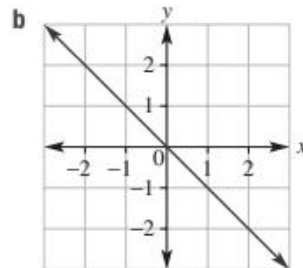
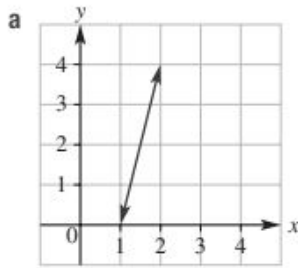


1 Find the gradient of the following lines.



2 What is the gradient of the line that joins these points?

- a (0, 1) and (2, 5)
- b (1, 3) and (2, -2)
- c (2, -1) and (4, -2)

3 What is the intercept on the vertical axis for the following lines?

