

Name : _____

Score : _____

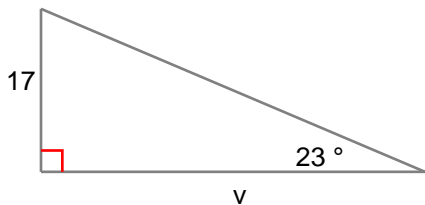
Teacher : _____

Date : _____

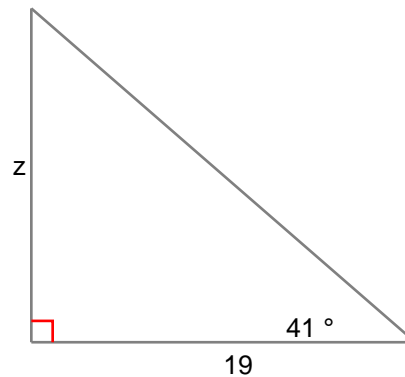
Solving Right Triangles

Find the side indicated by the variable. Round to the nearest tenth.

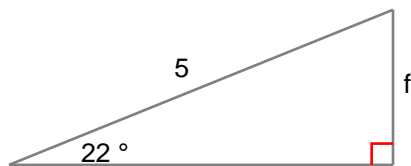
1) $v =$ _____



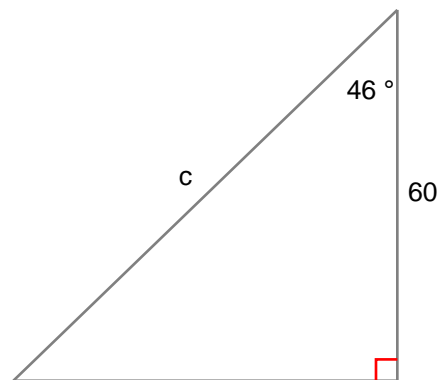
2) $z =$ _____



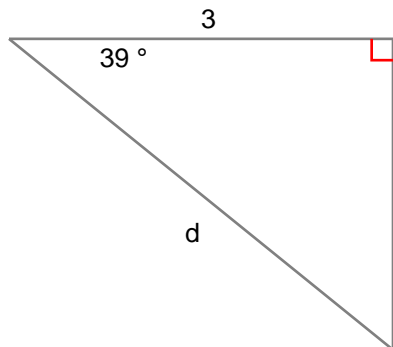
3) $f =$ _____



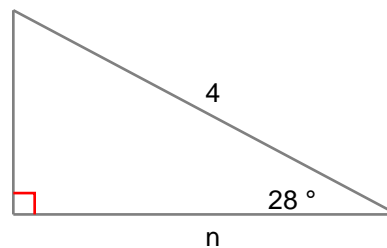
4) $c =$ _____



5) $d =$ _____



6) $n =$ _____



Name : _____

Score : _____

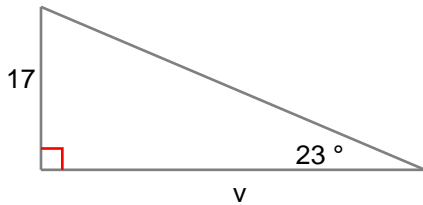
Teacher : _____

Date : _____

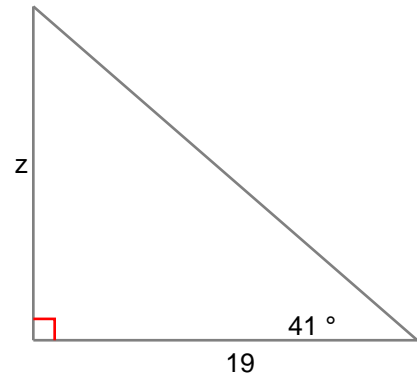
Solving Right Triangles

Find the side indicated by the variable. Round to the nearest tenth.

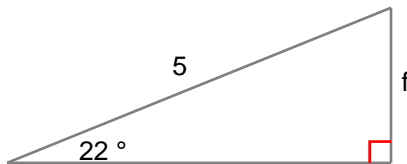
1) $v = \underline{40}$



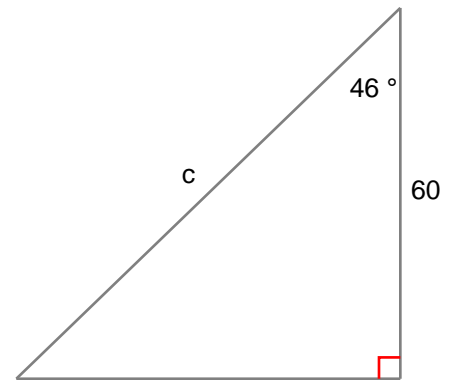
2) $z = \underline{16.5}$



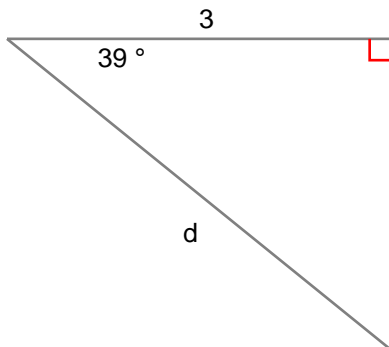
3) $f = \underline{1.9}$



4) $c = \underline{86.4}$



5) $d = \underline{3.9}$



6) $n = \underline{3.5}$

